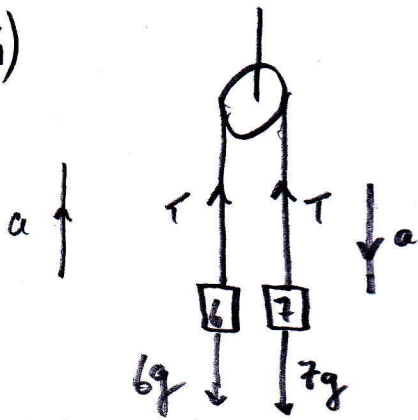


(a)(i)



$$F = ma$$

$$7g - T = 7a \quad \textcircled{1}$$

$$T - 6g = 6a \quad \textcircled{2}$$

$$\Rightarrow g = 13a$$

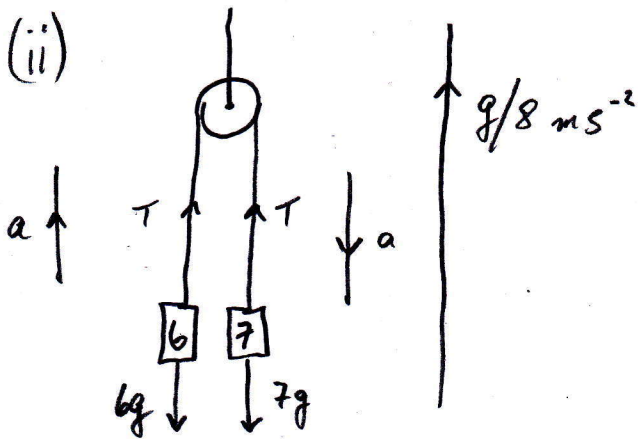
$$\Rightarrow a = \frac{g}{13}$$

$$7g - T = 7a \quad \textcircled{1}$$

$$\Rightarrow 7g - T = 7\left(\frac{g}{13}\right) \Rightarrow T = 7g - \frac{7g}{13}$$

$$\Rightarrow T = 63.32 \text{ N}$$

(ii)



$$7g - T = 7a \quad \textcircled{1}$$

$$\Rightarrow 7g - T = 7\left(a - \frac{g}{8}\right)$$

$$\text{and } T - 6g = 6\left(a + \frac{g}{8}\right) \quad \textcircled{2}$$

$$g = 7a - \frac{7g}{8} + 6a + \frac{6g}{8}$$

$$\Rightarrow g = 13a - \frac{g}{8}$$

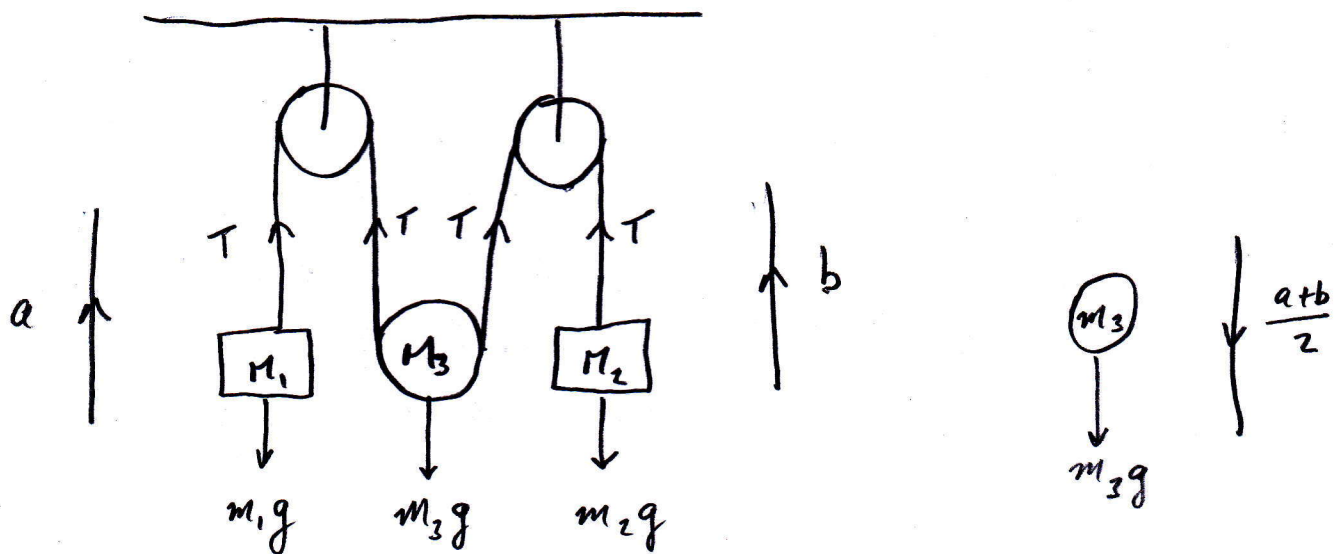
$$\Rightarrow g + \frac{g}{8} = 13a$$

$$\Rightarrow \frac{9g}{8} = 13a \Rightarrow a = \frac{9}{104}g$$

$$T - 6g = 6\left(\frac{9}{104}g + \frac{g}{8}\right) \quad \textcircled{2} \Rightarrow T = 71.24 \text{ N}$$

$$\Rightarrow T =$$

(b)



$$F = ma$$

$$T - m_1 g = m_1 a \quad (1)$$

$$T - m_2 g = m_2 b \quad (2)$$

$$m_3 g - 2T = m_3 \left(\frac{a+b}{2} \right) \quad (3)$$

$$(1) \quad T - m_1 g = m_1 a \Rightarrow a = \frac{T}{m_1} - g$$

$$(2) \quad T - m_2 g = m_2 b \Rightarrow b = \frac{T}{m_2} - g$$

$$(3) \quad m_3 g - 2T = \frac{m_3}{2} \left(\frac{T}{m_1} - g + \frac{T}{m_2} - g \right)$$

$$\Rightarrow 2m_3 g - 4T = \frac{m_3 T}{m_1} - m_3 g + \frac{m_3 T}{m_2} - m_3 g$$

$$\Rightarrow 2m_1 m_2 m_3 g - 4m_1 m_2 T = m_2 m_3 T - m_1 m_2 m_3 g + m_1 m_3 T - m_1 m_2 m_3 g$$

$$\Rightarrow 4m_1 m_2 m_3 g = T(4m_1 m_2 + m_2 m_3 + m_1 m_3) \text{ etc.}$$